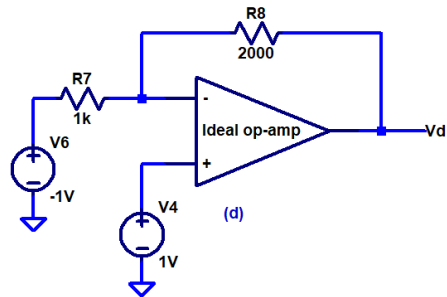
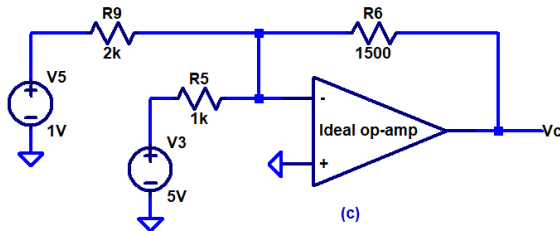
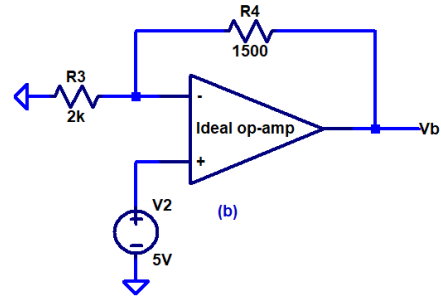
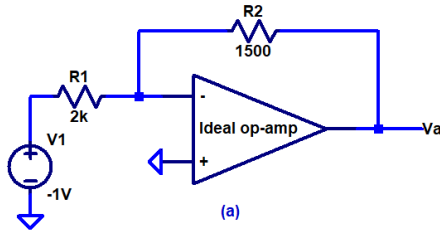


H.W. #5 EE 221 Spring 2023

Show your work for credit and put a box around each of your answers (follow the hw guidelines!)

1. Find the output voltages for each of the following circuits. As usual show your hand calculations (work) for credit. Verify your answers using LTspice. (6 points)



2. What is the current that flows in each of the feedback resistors in problem 1? Again, show your work for credit and verify your answers using LTspice. (2 points)